


Building blocks


Look at the buildings below. How many cubes, spheres, cylinders or pyramids are used to make each one? Write your answers next to them.



cubes ____

spheres ____

pyramids ____

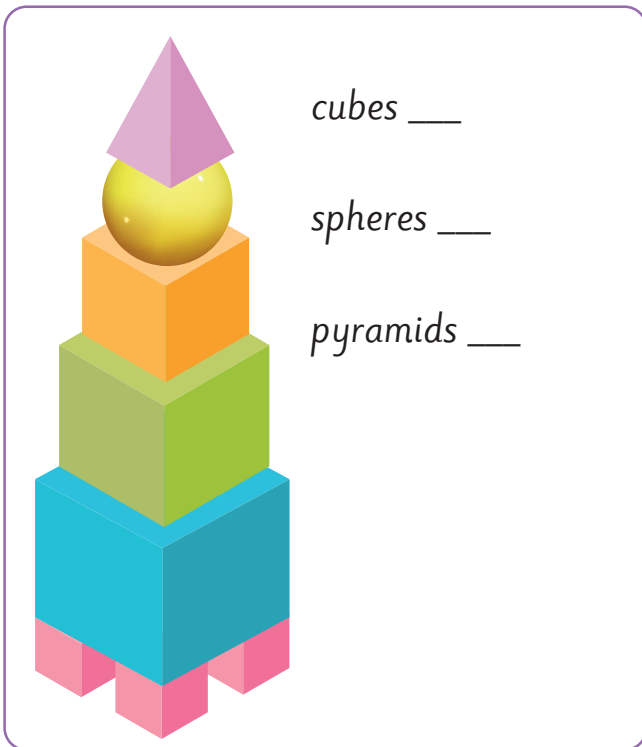


cubes ____

spheres ____

pyramids ____

cylinders ____



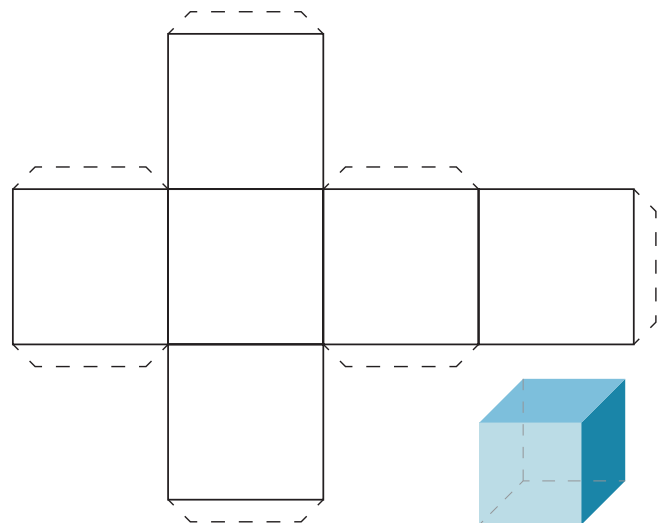
cubes ____

spheres ____

pyramids ____

Extra challenge!

Make a paper net of the cube shape. Copy the diagram on a piece of paper, cut it out, fold and glue the tabs together to make a cube.



Answers: Top left 10 cubes, 3 pyramids, 3 spheres. Top right 5 cubes, 3 spheres, 1 pyramid, 1 cylinder. Bottom left: 7 cubes, 1 sphere, 1 pyramid (total assumes there are 4 pink cubes on the bottom layer - only 3 are visible!)